


# Find a Half (1)


## Reasoning and Problem Solving

Jules and Freddy are both attempting to split a circle in half.

Jules




My way is the only way to show a half.



Freddy

My way is the only way to show a half.

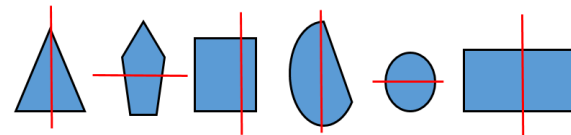


Who has correctly split the shape in half? Explain your answer.

Possible answer: They are both correct. There are lots of ways a circle can be split in half.

Sort the shapes into the table.

Shapes that are split in half	Shapes that are not split in half



Can you add one more shape to each box in the table?

Possible answer:

Shapes that show half	Shapes that do not show half

There are a number of different answers for other shapes children could add to the table.