

Good Morning Year 3s, Today's maths is on <https://whiterosemaths.com/homelearning/year-3> Look for Summer Term - Week 3 (w/c 4th May) - Lesson 3 and watch the video 'Subtract money' then have a go at the activity. (I have copied it below) When you have finished, I have set a new challenge for you on **Sumdog**.

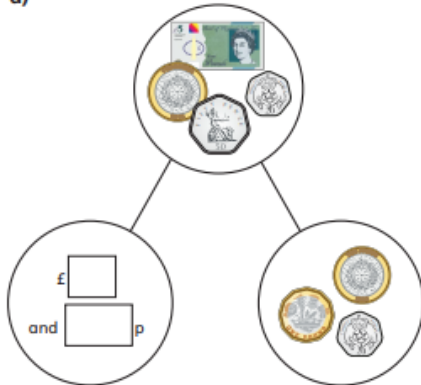


Subtract money

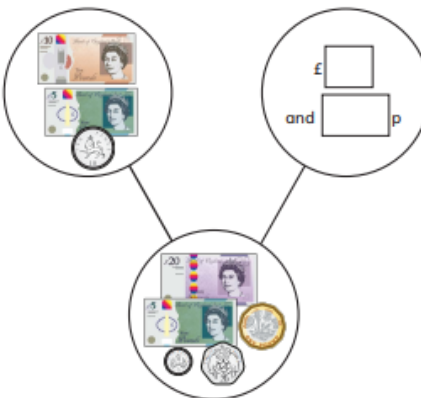


1 Complete the part-whole models.

a)



b)



2 Tommy has £5 and 75p in his pocket.



He puts £2 and 50p in his money box.
How much is left in his pocket?

£ and p

3 Whitney has £4 and 80p.

She buys this pair of socks.



How much money does Whitney have left?

£ and p

4 Complete the statements.

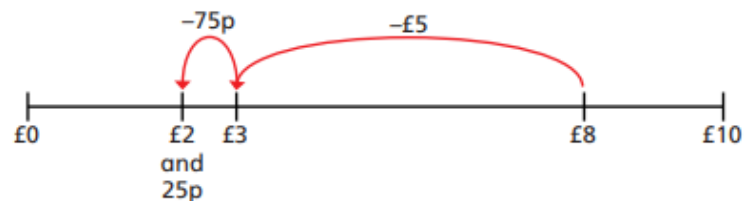
a) £8 and 65p - £5 and 25p = £ and p

b) £8 and 65p - £5 and 65p = £ and p

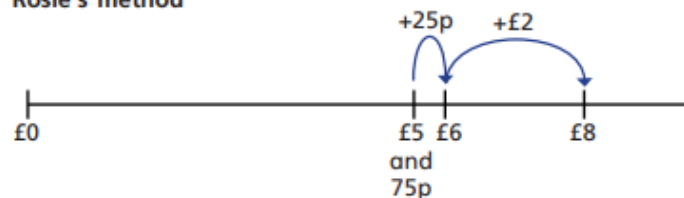
c) £8 and 65p - £8 and 30p = £ and p

5 Amir and Rosie use a number line to subtract £5 and 75p from £8

Amir's method



Rosie's method



Amir and Rosie both get £2 and 25p as their answer.

a) Explain each of these methods to a partner.

b) Whose method do you prefer? _____

Explain why.

6 Complete the number sentences.

a) £3 and 50p - £1 and 20p = £ and p

b) £3 - £1 and 50p = £ and p

c) £6 and 15p - £2 and 85p = £ and p

d) £8 and 7p - £3 and 54p = £ and p

Back	Alt+Left Arrow
Forward	Alt+Right Arrow
Reload	Ctrl+R
Save as...	Ctrl+S
Print...	Ctrl+P
Cast...	
Translate to English	
Rotate clockwise	Ctrl+]]
Rotate counterclockwise	Ctrl+[[
Inspect	Ctrl+Shift+I

models.

