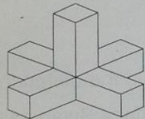



TODAY ITS VARIED MENTAL MATHS QUESTIONS. REMEMBER, Y6, YOU CAN WRITE JOTTINGS/ DRAW DIAGRAMS BUT YOU SHOULD NOT NEED FORMAL CALCULATIONS HERE

### SECTION 1

1	0.625 as a fraction.	6	$30.05 \times 10$ .
2	$48 \div 3$ .	7	$41 - 29 + 28$ .
3	The cube root of 125.	8	What is 0.03kg in grams?
4	$25 \div (9 - 4)$ .	9	$9.6 - 2.8$ .
5	Half of 0.5.	10	Find the total of 5, 9, 7, 4 and 6.

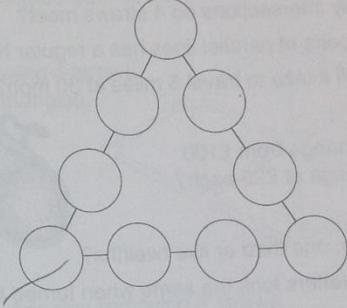
### SECTION 2

1	Which is colder: $0^{\circ}\text{C}$ or $0^{\circ}\text{F}$ ?	
2	How many 34p tins of beans can you get for £1?	
3	How many lines of symmetry has an equilateral triangle?	
4	Imagine a cone. How many edges has it?	
5	What is the least number of cubes needed to make this solid shape?	
6	Find the product of 8 and 52.	
7	How many planes of symmetry has a square based pyramid?	
8	Which is the smallest: 0.625, 0.25, 0.375, 0.125, 0.5?	
9	How many miles an hour is two miles a minute?	
10	Imagine a goat tied to a post. What shape is the area of grass it can eat?	

### SECTION 3

**Magic triangle**

Copy the diagram.



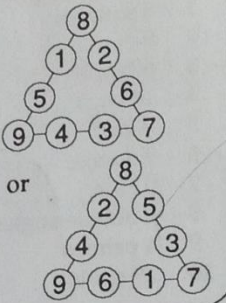
Use each of the numbers from 1 to 9.  
Write one number in every circle.  
The sum of the numbers on each side of the triangle must add up to 23.

1 2 3 4 5 6 7 8 9

- 1 Two ninths of 72.
- 2  $6.9 + 1.3$ .
- 3 28% as a decimal.
- 4 Multiply 33 by 4.
- 5  $6 - 9 - 2 + 8$ .
- 6  $16 \times 25$ .
- 7 What is 2mm in metres?
- 8  $37 + 26 - 11$ .
- 9 2% of 300 metres.
- 10 One eighth of 1000.

ANSWERS

Task one	task two
1 $\frac{5}{8}$	1 0°F is colder
2 16	2 2 tins
3 5	3 3 lines
4 5	4 1 edge
5 0.25	5 11 cubes
6 300.5	6 416
7 40	7 4 planes
8 30g	8 0.125 is least
9 6.8	9 120 mph
10 31	10 Circular

Task three	task four
 <p>or</p>	1 16 2 8.2 3 0.28 4 132 5 3 6 400 7 0.002 metres 8 52 9 6 metres 10 125