



Good morning Year 4s. Here is your maths for today. First watch the teaching video 'Pounds and pence' on <https://whiterosemaths.com/homelearning/year-4> and then have a go at this activity. When you have finished, login to Sumdog and have a go at the tasks and challenges I have set for you.

Pounds and pence

1 How much money is there?




p



£

What is the same and what is different?

2



a) Complete the statements.

There is pounds.

There is pence.

There is £ and p.


There is £

b) Draw money so that there are fewer coins but the same total amount.

3 Match the amounts that are equal.
Fill in the missing digits.


460p	£__ and __p	£4.62
420p	£4 and 62p	£4.06
__p	£4 and 6p	£4.20
462p	£4 and 20p	£. .
426p	£4 and 26p	£4.60


4 Match the person to the correct amount.



Ron


I have a note and some coins.






Rosie


I have more than Ron.





Jack

I have the most money.



- 5 Amir has a note in his pocket.
Annie has three coins in her pocket.



Amir must have more money than Annie.

Do you agree with Dora? _____

Explain your answer.

- 6 Kim has four coins.
- The coins add to a multiple of 10
 - The total amount is more than £1
 - All the coins are silver.
 - The total is less than £1.50

a) Which four coins could Kim have?

b) How many different combinations can you find?



- 7 Mo has this money.



Decide whether Mo's statements are true (T) or false (F).

Circle your answer and give a reason for your choice.

a) You can make an amount greater than £11 T F

b) You can make exactly £1.50 using three coins. T F

c) You can make exactly £2.02 using four coins. T F

d) You can make exactly £6.11 T F
