

Thurs 25<sup>th</sup> June y5 Today we will complete lesson 2 in week 5 of the y5 white rose maths: adding fractions


Watch the video again if it will help and complete the worksheet:

**4** Dexter has some tins of food. There are four types of food: beans, sweetcorn, soup and tomatoes.

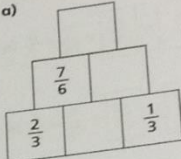
- The total weight of all the tins is 2 kg.
- The tins of beans weigh  $\frac{2}{3}$  kg.
- The tins of sweetcorn weigh  $\frac{5}{12}$  kg.
- The tins of soup weigh  $\frac{1}{4}$  kg.

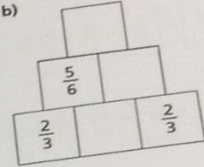
a) Work out the total weight of the tins of beans, sweetcorn and soup.

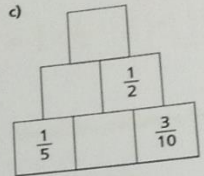
b) How much do the tins of tomatoes weigh?



**5** Complete the addition pyramids.

a) 

b) 

c) 

**6** What could the three missing numerators be?

$$\frac{\square}{4} + \frac{\square}{12} + \frac{\square}{3} = \frac{13}{12}$$

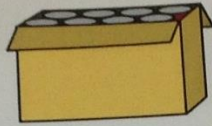
Give three different possibilities.

$$\frac{\square}{4} + \frac{\square}{12} + \frac{\square}{3} = \frac{13}{12}$$
$$\frac{\square}{4} + \frac{\square}{12} + \frac{\square}{3} = \frac{13}{12}$$
$$\frac{\square}{4} + \frac{\square}{12} + \frac{\square}{3} = \frac{13}{12}$$

© WJ

4 Dexter has some tins of food. There are four types of food: beans, sweetcorn, soup and tomatoes.

- The total weight of all the tins is 2 kg.
- The tins of beans weigh  $\frac{2}{3}$  kg.
- The tins of sweetcorn weigh  $\frac{5}{12}$  kg.
- The tins of soup weigh  $\frac{1}{4}$  kg.



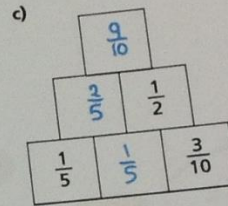
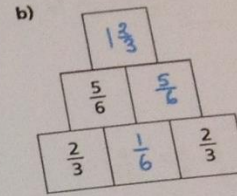
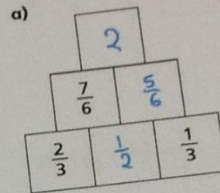
a) Work out the total weight of the tins of beans, sweetcorn and soup.

$$\boxed{1\frac{1}{3} \text{ kg}}$$

b) How much do the tins of tomatoes weigh?

$$\boxed{\frac{2}{3} \text{ kg}}$$

5 Complete the addition pyramids.



6 What could the three missing numerators be?

$$\frac{\square}{4} + \frac{\square}{12} + \frac{\square}{3} = \frac{13}{12}$$

Give three different possibilities.

$$\frac{1}{4} + \frac{6}{12} + \frac{1}{3} = \frac{13}{12}$$

$$\frac{2}{4} + \frac{3}{12} + \frac{1}{3} = \frac{13}{12}$$

$$\frac{1}{4} + \frac{2}{12} + \frac{2}{3} = \frac{13}{12}$$