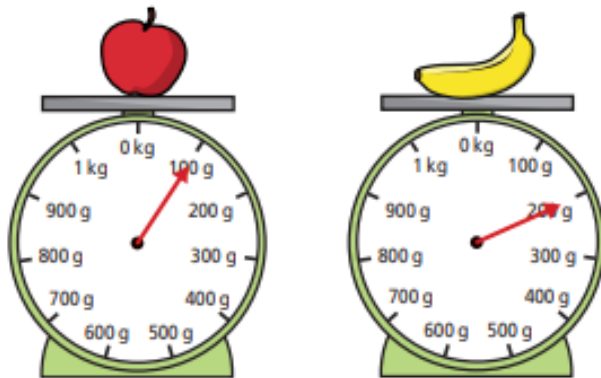


Good morning Year 3s, for maths today, go to <https://whiterosemaths.com/homelearning/year-3/> and look for Summer week 11, lesson 3,

## Add and subtract mass

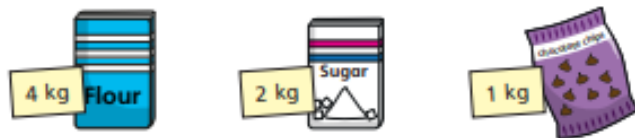


- 1 Teddy is measuring the weight of some fruit.



- a) What is the weight of the apple?  g
- b) What is the weight of the banana?  g
- c) Teddy puts both pieces of fruit on the same scale.  
What is the total weight of the apple and the banana?  g

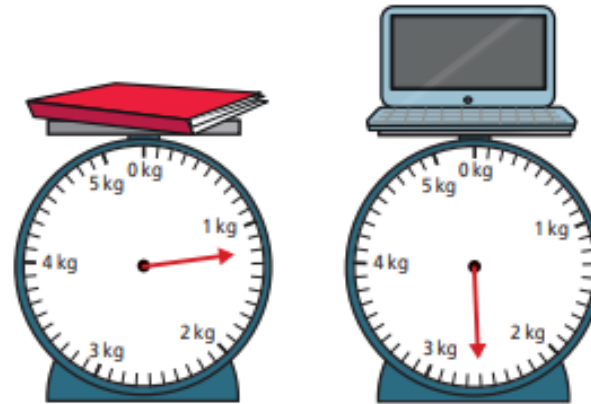
- 2 Alex is measuring the weight of some ingredients.



What is the total weight of the ingredients?

kg

- 3 Ron is measuring the mass of some objects in the classroom.




Ron puts both objects on the same scale.

What is the total mass of the objects?

kg and  g

- 4 Aisha is weighing out some cereal.

First she puts the bowl on the scales. Then she pours out some cereal.



What is the weight of the cereal in the bowl?

g

© White Rose Maths 2020

and watch the teaching video, 'Add and subtract mass'. Then there are some questions to answer below.

**Remember** that you need to **SUBTRACT** to find the **DIFFERENCE** – drawing a bar model will help you.

- 5 A dog weighs 8 kg and 200 g when it is 8 weeks old.

The same dog weighs 12 kg and 900 g when it is 12 weeks old.

What is the difference in the dog's weight between 8 and 12 weeks?

kg and  g

- 6 The mass of a tin is 450 g.

The mass of a book is 300 g.



Draw books on the scales to balance the tins.



- 7 Complete the number sentences.

a)  $1\text{ kg } 250\text{ g} + 5\text{ kg } 300\text{ g} = \text{  kg  g}$

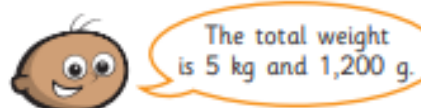
b)  $3\text{ kg } 450\text{ g} + 8\text{ kg } 120\text{ g} = \text{  kg  g}$

c)  $15\text{ kg } 960\text{ g} - 11\text{ kg } 270\text{ g} = \text{  kg  g}$

d)  $36\text{ kg } 317\text{ g} - 21\text{ kg } 199\text{ g} = \text{  kg  g}$

e)  $1\text{ kg} - \text{  g} = 200\text{ g}$

- 8 Tommy and Rosie are working out the total weight of the box and the suitcase.



Tommy

The total weight is 6 kg and 200 g.



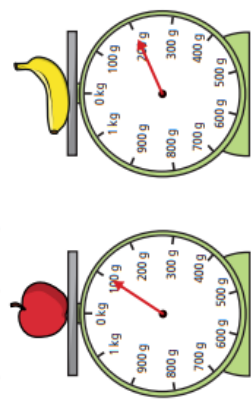
Rosie

Who is correct? \_\_\_\_\_

Talk about it with a partner.

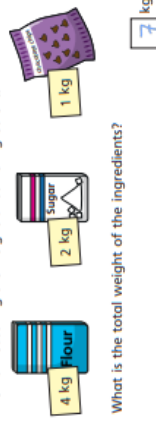
## Add and subtract mass

- 1 Teddy is measuring the weight of some fruit.



- a) What is the weight of the apple?  g
- b) What is the weight of the banana?  g
- c) Teddy puts both pieces of fruit on the same scale.  
What is the total weight of the apple and the banana?  g

- 2 Alex is measuring the weight of some ingredients.



What is the total weight of the ingredients?  kg

- 5 A dog weighs 8 kg and 200 g when it is 8 weeks old.  
The same dog weighs 12 kg and 900 g when it is 12 weeks old.  
What is the difference in the dog's weight between 8 and 12 weeks?

kg and  g

- 6 The mass of a tin is 450 g.  
The mass of a book is 300 g.

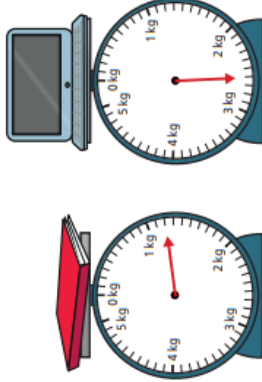


Draw books on the scales to balance the tins.



## Answers

- 3 Ron is measuring the mass of some objects in the classroom.

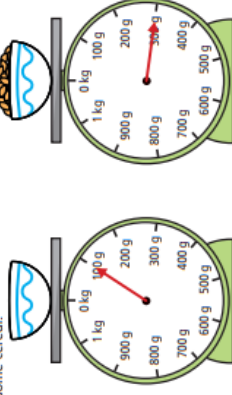


Ron puts both objects on the same scale.

What is the total mass of the objects?  kg and  g

- 4 Aisha is weighing out some cereal.

First she puts the bowl on the scales. Then she pours out some cereal.



What is the weight of the cereal in the bowl?  g

© White Rose Maths 2020

- 7 Complete the number sentences.

- a) 1 kg 250 g + 5 kg 300 g =  kg  g
- b) 3 kg 450 g + 8 kg 120 g =  kg  g
- c) 15 kg 960 g - 11 kg 270 g =  kg  g
- d) 36 kg 317 g - 21 kg 199 g =  kg  g
- e) 1 kg -  g = 200 g

- 8 Tommy and Rosie are working out the total weight of the box and the suitcase.



The total weight is 5 kg and 1,200 g.

Tommy

The total weight is 6 kg and 200 g.

Rosie

Who is correct? Both  
Talk about it with a partner.